

Name: _____

Time to the Quarter Hour

Telling Time

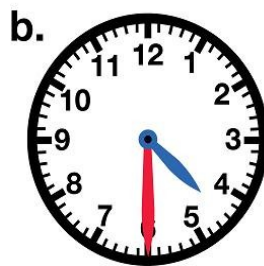
To the Nearest Quarter Hour

Write the time shown on each clock. Write it the "regular way" and the "smart way." The first one has been done for you.

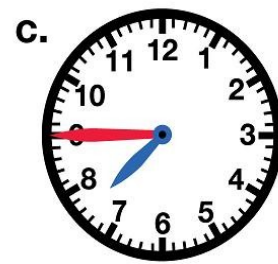


2:15

Quarter after 2



____ : ____



____ : ____



____ : ____



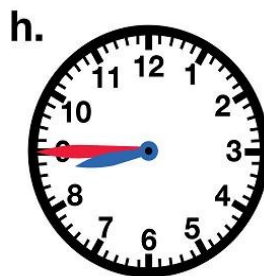
____ : ____



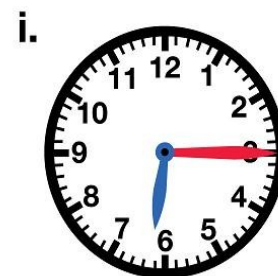
____ : ____



____ : ____



____ : ____



____ : ____